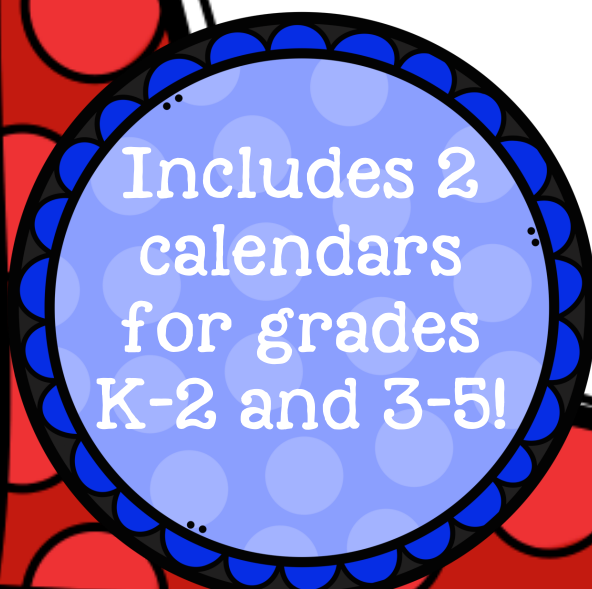




August Problem of the Day Calendar

Created by:

Bethany @
MathGeekMama.com



Includes 2
calendars
for grades
K-2 and 3-5!



*Back to
school time!*

Thank you for downloading this resource from MathGeekMama.com!

I love providing high quality math teaching resources for parents and educators, but I ask that you please abide by the following terms of use. This allows me to continue providing resources for free! Thank you for your honesty and support of my work!

Please do:

- Download to your computer for personal use in the home or classroom
- Print copies for your personal use

Please do NOT:

- Link directly to the pdf file
- Save or store the file on your website
- Edit this resource in any way
- Print this resource to sell or distribute to others.


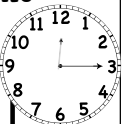

If you would like to share this (or other) resources with friends or colleagues, please direct them to my website to download a copy for themselves. Thank you!






August Problem of the Day



Sunday	Monday	Tuesday	Wednesday	Thursday	Friday	Saturday
	Tom has 22 apples and Ann has 21. How many more does Tom have? <input type="text"/>	$64 - 62 =$ <input type="text"/>	What number is in the hundreds place in 364? <input type="text"/>	Lily and Ben have 8 apple slices. How many can they each eat if they share them equally? <input type="text"/>	The hour shown on the clock is:  <input type="text"/>	How many sides does a hexagon have? <input type="text"/>
Sam has 16 marbles and Jon has 9. How many more does Sam have? <input type="text"/>	There are 16 birds in the yard. 8 are flying, the rest are in the nest. How many are in the nest? <input type="text"/>	Complete the sequence: 0, 3, 6, ____ <input type="text"/>	$56 - 46 =$ <input type="text"/>	Find the difference between 26 and 15. <input type="text"/>	How much more is 16 than 4? <input type="text"/>	What number is 5 less than 18? <input type="text"/>
Ben has 10 red cars and 4 blue cars. How many does he have altogether? <input type="text"/>	How many minutes are shown on the clock?  <input type="text"/>	10 less than 26 is equal to: <input type="text"/>	$8 + 9 =$ <input type="text"/>	What is the value of 2 nickels and 8 pennies? <input type="text"/>	Find the sum of 6, 9 and 4. <input type="text"/>	What is the value of 2 tens? <input type="text"/>
Two tens and 1 one is equal to: <input type="text"/>	Kit spends 3 minutes brushing his teeth, 4 minutes dressing, and 15 minutes eating. How long does he spend getting ready in total? <input type="text"/>	Which is greater, 19 or 23? <input type="text"/>	3 sisters have 8 pieces of candy each. How many do they have altogether? <input type="text"/>	$15 + 5 + 5 =$ <input type="text"/>	Complete the sequence: 32, 30, 28, ____ <input type="text"/>	The sides of a triangle are all equal to 9. Find the perimeter. <input type="text"/>
What is the value of 2 dimes, 1 nickel and 3 pennies? <input type="text"/>	$19 + 10 =$ <input type="text"/>	How many minutes are in a half hour? <input type="text"/>	8 less than 39 is equal to: <input type="text"/>			



August Problem of the Day

Sunday	Monday	Tuesday	Wednesday	Thursday	Friday	Saturday
	There are 8 friends and 8 crayons. How many crayons does each kid get? <input type="text"/>	$\frac{1}{6} + 1\frac{5}{6} =$ <input type="text"/>	Ms. Smith's class has 15 students. $\frac{1}{5}$ are sick. How many are sick? <input type="text"/>	Ben played Pokemon Go for 6 hours and caught 24 Pokemon. How many did he catch per hour? <input type="text"/>	The area of a rectangle is 30. If the length is 6, what is the width? <input type="text"/>	What number is in the thousands place: 36, 492 <input type="text"/>
$192 - 185 =$ <input type="text"/>	3 friends share 24 candies. How many does each get to eat if they share equally? <input type="text"/>	A square has an area of 81. What is the length of each side? <input type="text"/>	Find $\frac{1}{4}$ of 40 <input type="text"/>	How much more is 8×7 than 9×5 ? <input type="text"/>	$144 \div 12 =$ <input type="text"/>	What number is 29 less than 6×7 ? <input type="text"/>
$8\frac{1}{4} + 5\frac{3}{4} =$ <input type="text"/>	Find the perimeter of a triangle whose sides all equal 5 cm. <input type="text"/>	Four shelves each have 4 pictures. How many are there altogether? <input type="text"/>	$2,541 - 2,524 =$ <input type="text"/>	Six kids each have 3 books in their backpack. How many books are there? <input type="text"/>	What's the difference between 8×8 and 15×3 ? <input type="text"/>	$60 \div 3 =$ <input type="text"/>
$562 - 541 =$ <input type="text"/>	How much less is 3×6 than 4×10 ? <input type="text"/>	Find 5 more than 9×2 : <input type="text"/>	Find the area of a rectangle whose length is 12 and width is 2. <input type="text"/>	100 textbooks are split between 4 classrooms. How many books does each class get? <input type="text"/>	$621 - 595 =$ <input type="text"/>	What number is 54 less than 9×9 ? <input type="text"/>
Find the perimeter of a quadrilateral with side lengths 8, 3, 7 and 10. <input type="text"/>	Find the number that is 19 less than 12×4 : <input type="text"/>	Round 28 to the nearest ten: <input type="text"/>	What number is 5 more than 13×2 ? <input type="text"/>			

Thank You!

This resource was made possible thanks to the clipart and fonts from these shops:



<https://www.teacherspayteachers.com/Store/Krista-Walden>
<https://www.teacherspayteachers.com/Store/Kimberly-Geswein-Fonts>
<http://brittneymurphydesign.com/>
<https://www.teacherspayteachers.com/Store/A-Little-Peace-Of-Africa>



Connect with Me:

Website: www.MathGeekMama.com

FB: <https://www.facebook.com/mathgeekmama/>

Pin: <https://www.pinterest.com/mathgeekmama/>

T/IG: @mathgeekmama