



# June Problem of the Day Calendar

Multiple  
versions for  
grades K-5!



# Thank you for downloading this resource from MathGeekMama.com!

I love providing high quality math teaching resources for parents and educators, but I ask that you please abide by the following terms of use. This allows me to continue providing resources for free! Thank you for your honesty and support of my work!

Please do:

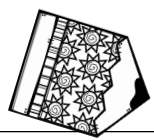
1. Download to your computer for personal use in the home or classroom
2. Print copies for your personal use

Please do NOT:

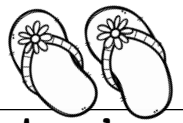
1. Link directly to the pdf file
2. Save or store the file on your website
3. Edit this resource in any way
4. Print this resource to sell or distribute to others.

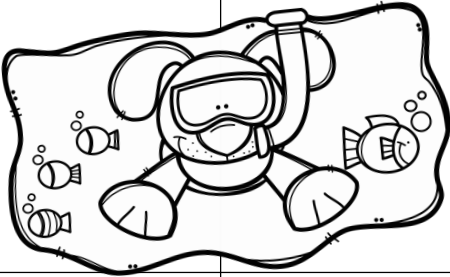
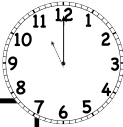
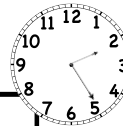

If you would like to share this (or other) resources with friends or colleagues, please direct them to my website to download a copy for themselves. Thank you!

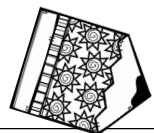




# June Problem of the Day

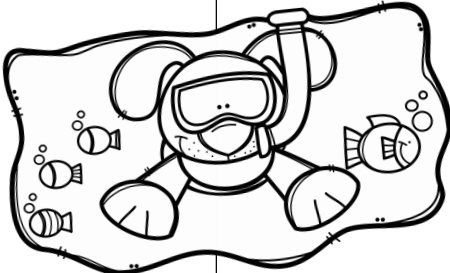



Sunday	Monday	Tuesday	Wednesday	Thursday	Friday	Saturday
			What is 10 less than 11? <input type="text"/>	$57 - 55 =$ <input type="text"/>	3 friends have 9 cookies. How many does each friend get? <input type="text"/>	Outside are two nests. There are 2 birds in each. How many birds are there? <input type="text"/>
Complete the sequence: 20, 15, 10, ... <input type="text"/>	$20 - 14 =$ <input type="text"/>	Find the missing number: $3 + ? = 10$ <input type="text"/>	What number is in the ones place in 28? <input type="text"/>	What number is 10 less than 19? <input type="text"/>	How many tens are in 100? <input type="text"/>	What is the hour shown on the clock?  <input type="text"/>
$30 - 18 =$ <input type="text"/>	What number is 4 more than 9? <input type="text"/>	What do you get when you double 7? <input type="text"/>	Ann, Tom and Sam each have 5 treats. How many do they have altogether? <input type="text"/>	Find the sum of 2, 8 and 6. <input type="text"/>	What is 5 more than 12? <input type="text"/>	Complete the sequence: 12, 14, 16, ... <input type="text"/>
A shelter had 25 dogs but 6 were adopted. How many are left? <input type="text"/>	What is the value of the tens place in 27? <input type="text"/>	$14 + 7 =$ <input type="text"/>	Which number is greater, 18 or 22? <input type="text"/>	What is 6 less than 29? <input type="text"/>	How many hours are in a day? <input type="text"/>	How many minutes are shown on the clock?  <input type="text"/>
What number is double 13? <input type="text"/>	Find 7 more than 20. <input type="text"/>	Beth had 4 cookies left, so she made 24 more. How many does she have now? <input type="text"/>	$16 + 13 =$ <input type="text"/>	Complete the sequence: 15, 20, 25, ... <input type="text"/>		



# June Problem of the Day



Sunday	Monday	Tuesday	Wednesday	Thursday	Friday	Saturday
			$\frac{4}{5} + \frac{1}{5} =$ <input type="text"/>	$100 \div 50 =$ <input type="text"/>	What number is in the thousands place: 3,294 <input type="text"/>	The area of a rectangle is 64. The width is 16. Find the length. <input type="text"/>
How much more is $8 \times 5$ than $7 \times 5$ ? <input type="text"/>	54 kids are placed in 9 groups. How many are in each group? <input type="text"/>	Find the difference between 91 and 84. <input type="text"/>	$24 \div 3 =$ <input type="text"/>	27 fish are put in three tanks. How many are in each tank? <input type="text"/>	Find $\frac{1}{4}$ of 40: <input type="text"/>	$1,005 - 994 =$ <input type="text"/>
There are 36 marbles split into 3 bags. How many are in each bag? <input type="text"/>	What number is 3 more than $2 \times 5$ ? <input type="text"/>	What is the difference between 206 and 192? <input type="text"/>	Find $\frac{1}{3}$ of 45: <input type="text"/>	$430 - 414 =$ <input type="text"/>	How much more is $7 \times 6$ than $5 \times 5$ ? <input type="text"/>	6 friends each have 3 balloons. How many balloons do they have? <input type="text"/>
$8\frac{1}{2} + 10\frac{1}{2} =$ <input type="text"/>	What is the value of the tens place: 2,628 <input type="text"/>	How much more is 81 than 60? <input type="text"/>	What is 2 more than $4 \times 5$ ? <input type="text"/>	$100 - 77 =$ <input type="text"/>	$9\frac{1}{3} + 14\frac{2}{3} =$ <input type="text"/>	If each side of a pentagon is 5 inches, what is the total perimeter? <input type="text"/>
Find the area of a rectangle with width of 2 and length of 13. <input type="text"/>	Nine plates each have 3 cookies. How many cookies are there? <input type="text"/>	How much more is $8 \times 8$ than $6 \times 6$ ? <input type="text"/>	$763 - 733 =$ <input type="text"/>	An equilateral triangle has sides equal to 10. What is the perimeter? <input type="text"/>		

# Thank You!

This resource was made possible thanks to the clipart and fonts from these shops:



<https://www.teacherspayteachers.com/Store/Krista-Walden>  
<https://www.teacherspayteachers.com/Store/Kimberly-Geswein-Fonts>  
<http://brittneymurphydesign.com/>



## Connect with Me:

**Website:** [www.MathGeekMama.com](http://www.MathGeekMama.com)

**FB:** <https://www.facebook.com/mathgeekmama/>

**Pin:** <https://www.pinterest.com/mathgeekmama/>

**T/IG:** @mathgeekmama